


지엄탐구 영역 (해양일반) 직업탐구 영역 (해양일반)

1



3. 그림에 대한 설명으로 틀린 것은?

h 46m

h 48m

h 51m

h 49m

h 10m

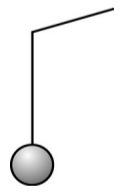
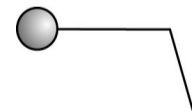
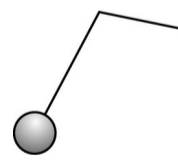
3)

2)

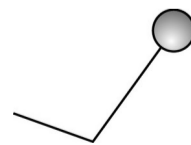
2)

직업탐구 영역 (해양일반)

바람과 조류의 영향은 고려하지 않는다.) [3 점]




[3 점]



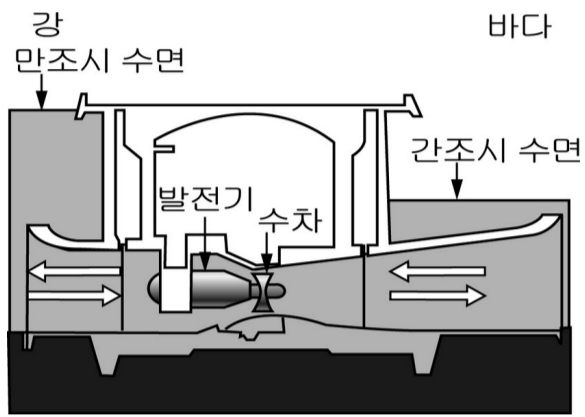
직업탐구 영역 (해양일반)

3

그 나



직업탐구 영역 (해양일반)



5

직업탐구 영역 (해양일반)

